
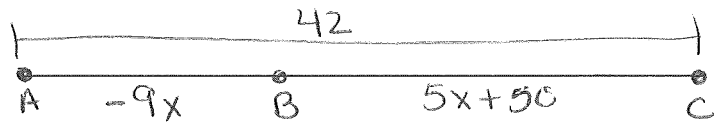


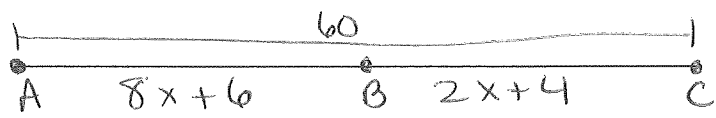
Name: \_\_\_\_\_


Date: \_\_\_\_\_

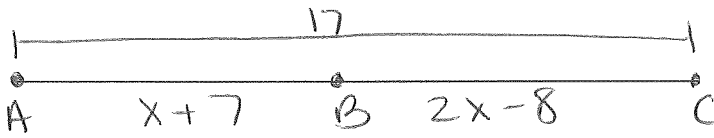
Segment Addition Postulate: Solve for  $x$  and show all work.


1. 

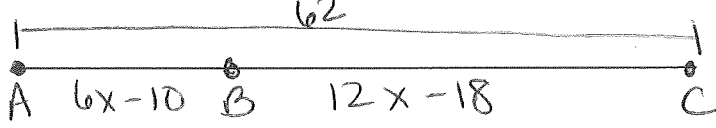
A  $x-1$  B  $3x$  C
2. 


A  $-9x$  B  $5x+50$  C
3. 

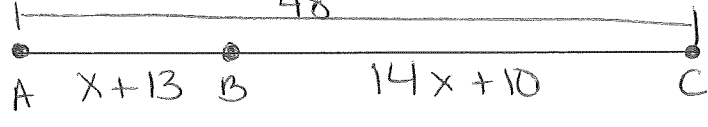
A  $8x+6$  B  $2x+4$  C
4. 


A  $3x+8$  B  $x+6$  C
5. 

A  $x+7$  B  $2x-8$  C
6. 

A  $3x+10$  B  $4x-3$  C
7. 

A  $6x-10$  B  $12x-18$  C
8. 

A  $6x+2$  B  $3x+12$  C
9. 

A  $x+13$  B  $14x+10$  C
10. 

A  $6x-10$  B  $7x-15$  C